

CAMBRIDGE INTERNATIONAL EXAMINATIONS  
International General Certificate of Secondary Education

**GEOGRAPHY**

**0460/02**

Paper 2

October/November 2003

INSERT

**1 hour 45 minutes**

[www.PapaCambridge.com](http://www.PapaCambridge.com)

**READ THESE INSTRUCTIONS FIRST**

This insert contains Photograph A for Question 2 and Fig. 8 for Question 6.

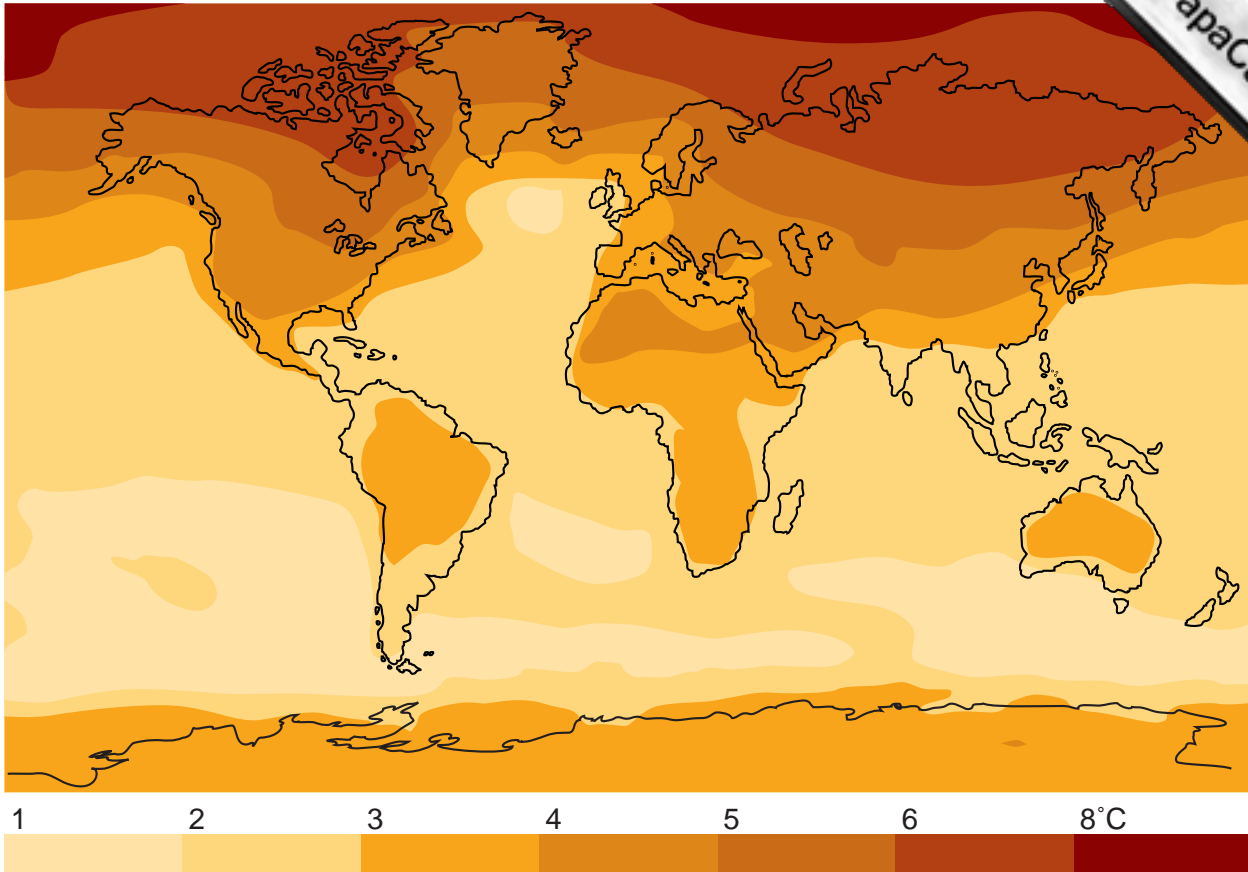
This document consists of **3** printed pages and **1** blank page.

UNIVERSITY of CAMBRIDGE

Photograph A for Question 2

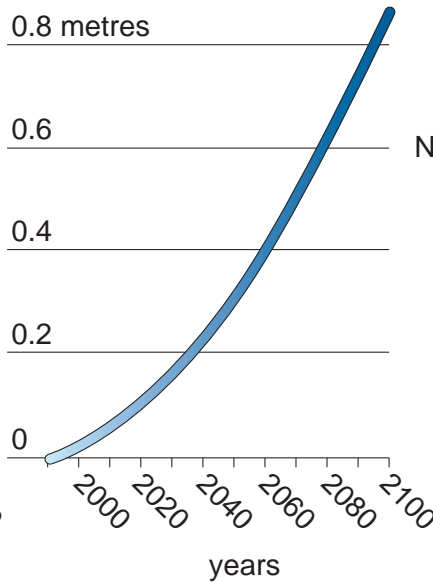
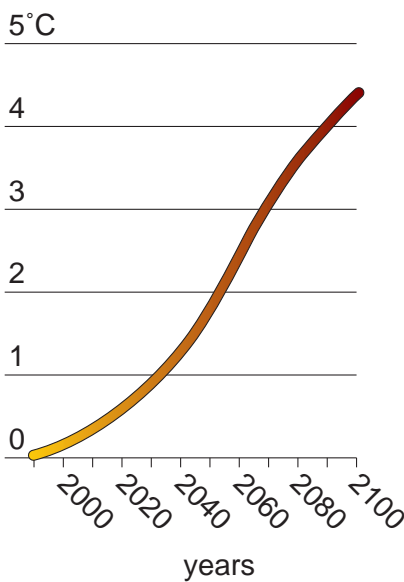


Fig. 8 for Question 6

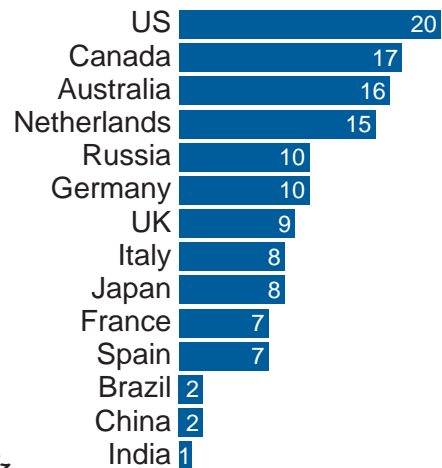


The annual mean change of the temperature between now and 2100 if the world does not act on warnings. Some areas could be 8°C hotter

**Temperature change and sea level rise**  
without political action to cut emissions



**CO<sub>2</sub> emissions**  
tonnes CO<sub>2</sub> emissions from fossil fuel combustion, per capita, 1998



BLANK PAGE

[www.PapaCambridge.com](http://www.PapaCambridge.com)